



**ARMY BURN HALL COLLEGE FOR GIRLS ABBOTTABAD**  
**ENTRANCE- EXAM 2022**

**CLASS/I**  
**TIME: 2 hrs.**

**SUBJECT: MATHEMATICS**  
**MAX MARKS: /50**

**NAME: \_\_\_\_\_**

<b>Q.No</b>	<b>1</b>	<b>2</b>	<b>3</b>	<b>4</b>	<b>5</b>	<b>6</b>	<b>7</b>	<b>8</b>	<b>9</b>	<b>Total</b>
<b>Marks</b>	<b>12</b>	<b>6</b>	<b>4</b>	<b>5</b>	<b>5</b>	<b>5</b>	<b>8</b>	<b>3</b>	<b>2</b>	<b>50</b>
<b>Marks Obt</b>										
<b>Exmnr .Sign</b>										

**Q.1: Write in words: (12)**

<b>3</b>		<b>5</b>	
<b>7</b>		<b>10</b>	
<b>15</b>		<b>20</b>	

**Q.2: Add: (6)**

<b>5</b>
<b>+ 5</b>

<b>7</b>
<b>+ 1</b>

<b>3</b>
<b>+ 5</b>

**Q.3: Subtract: (4)**

<b>8</b>
<b>- 4</b>

<b>6</b>
<b>- 3</b>

**Q.4: Write the number that comes before, between and after: (5)**

- a) 12 , \_\_\_\_\_ , 14
- b) \_\_\_\_\_ , 5, 6
- c) 18, 19 , \_\_\_\_\_
- d) 9 , \_\_\_\_\_, 11
- e) 16 , \_\_\_\_\_ , 18

**Q.5: Write in ascending order: (5)**

- 1, 5, 2, 4, 3

\_\_\_\_\_

**Q.6: Write in descending order: (5)**


- 10, 8, 6, 7, 9

\_\_\_\_\_

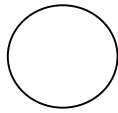
Q.7: Write the names of the following the shapes:

(8)

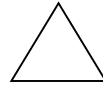
1)



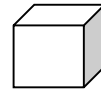
2)



3)



4)



\_\_\_\_\_

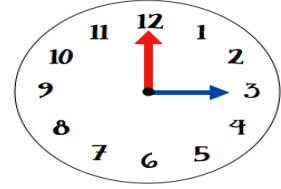
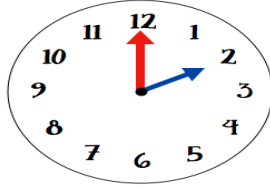
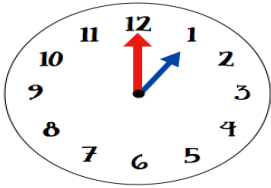
\_\_\_\_\_

\_\_\_\_\_

\_\_\_\_\_

Q.8: Write the time as o'clock:

(3)



\_\_\_\_\_

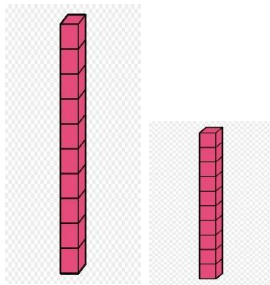
\_\_\_\_\_

\_\_\_\_\_

Q.9: Circle the taller:

(2)

1).



2).

